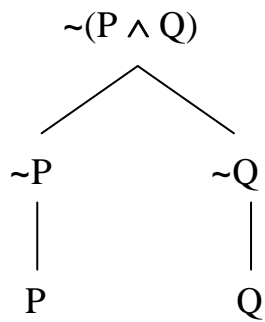


Chapter Three Construction Problems: Bad Trees

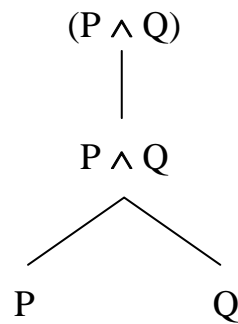
For each of the following **bad construction trees**, explain what **mistake** has been made in building that tree.

☠ Bad Tree 1 ☠



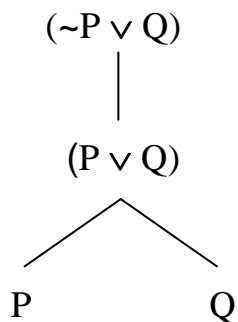
Mistake:

☠ Bad Tree 2 ☠



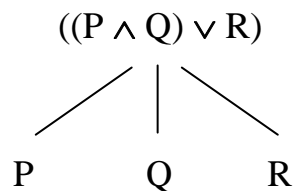
Mistake:

☠ Bad Tree 3 ☠



Mistake:

☠ Bad Tree 4 ☠



Mistake: